


# NOTE VALUES

Draw lines to match these notes with their names:



HALF NOTE



QUARTER NOTE





WHOLE NOTE



QUARTER REST

Write how many counts each note or rest receives:



\_\_\_\_\_

\_\_\_\_\_

\_\_\_\_\_

\_\_\_\_\_